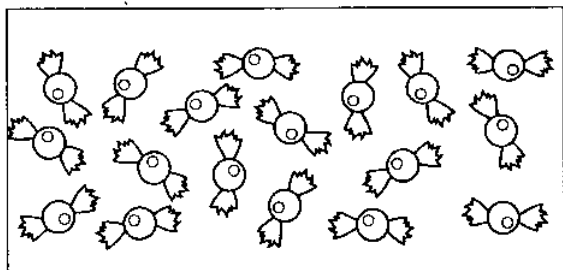


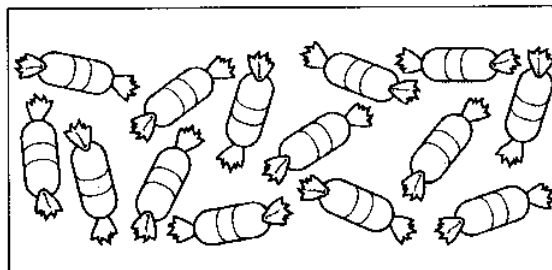
Nome: \_\_\_\_\_

Data: \_\_\_\_\_

1 - Faz grupos de ...




6




4


2 - Desenha as folhas que faltam para as plantas terem o número indicado.




3



4



6



6



5


3 - Escreve a quantidade debaixo de cada gravura.



\_\_\_\_\_



\_\_\_\_\_



\_\_\_\_\_

4 - Coloca o sinal <, >, =.

5 \_\_\_\_\_ 3

2+2 \_\_\_\_\_ 6

2 \_\_\_\_\_ 4

$$1+1 \underline{\quad} 2$$
$$6 \underline{\quad} 3$$

$$6 \underline{\quad} 1$$
$$2 \underline{\quad} 1$$

$$5 \underline{\quad} 6$$
$$5 - 2 \underline{\quad} 3$$

5 - Descobre os números que faltam nas igualdades.

$4 + \underline{\quad} = 6$       $5 = \underline{\quad} + 1$       $3 + \underline{\quad} = 6$       $4 + 2 =$


        

$5 + \underline{\quad} = 6$       $6 = \underline{\quad} + \underline{\quad}$       $2 + \underline{\quad} = 6$       $\underline{\quad} + 2 = 4$


6 - Liga com um traço.

<div style="border: 1px solid black; padding: 5px; display: inline-block;">6</div> ●	●	<div style="border: 1px solid black; padding: 5px; display: inline-block;">1 + 1</div>	<div style="border: 1px solid black; padding: 5px; display: inline-block;">4</div> ●	●	<div style="border: 1px solid black; padding: 5px; display: inline-block;">3 + 2</div>
<div style="border: 1px solid black; padding: 5px; display: inline-block;">3</div> ●	●	<div style="border: 1px solid black; padding: 5px; display: inline-block;">2 + 4</div>	<div style="border: 1px solid black; padding: 5px; display: inline-block;">6</div> ●	●	<div style="border: 1px solid black; padding: 5px; display: inline-block;">2 + 2</div>
<div style="border: 1px solid black; padding: 5px; display: inline-block;">2</div> ●	●	<div style="border: 1px solid black; padding: 5px; display: inline-block;">2 + 1</div>	<div style="border: 1px solid black; padding: 5px; display: inline-block;">5</div> ●	●	<div style="border: 1px solid black; padding: 5px; display: inline-block;">3 + 3</div>

7 - Desenha o número de elementos indicado.



4



6