

Apoio ao Estudo

Nome : _____ Data : ___/___/___

1 Observa os seguintes números.

11	7	19	5	14	17	3
18	9	16	12	6	15	10

1.1 Ordena-os do menor para o maior.

_____ < _____ < _____ < _____ < _____ < _____ < _____ < _____
< _____ < _____ < _____ < _____ < _____ < _____ < _____

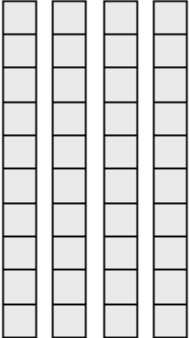
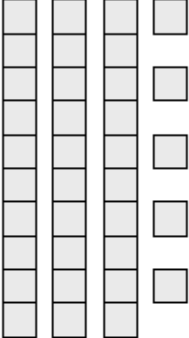
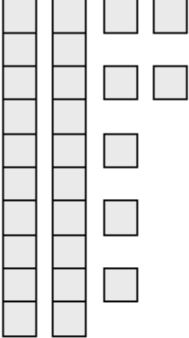
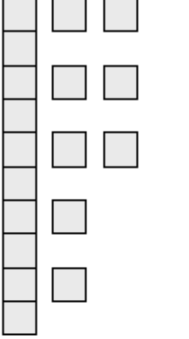
1.2 Ordena-os do maior para o menor.

_____ > _____ > _____ > _____ > _____ > _____ > _____ > _____
> _____ > _____ > _____ > _____ > _____ > _____ > _____

2 Calcula e depois completa com $>$, $<$ ou $=$.

$15 + 4$ ↓ □	$20 + 3$ ↓ □	$17 + 3$ ↓ □	$10 + 10$ ↓ □
□	□	□	□
$13 + 5$ ↓ □	$11 + 6$ ↓ □	$22 + 3$ ↓ □	$21 + 4$ ↓ □
□	□	□	□

3 Conta e completa.

	<table border="1" data-bbox="536 427 743 611"><tr><td>D</td><td>U</td></tr><tr><td> </td><td> </td></tr></table>	D	U			$\underline{\quad} + \underline{\quad} = \underline{\quad}$ <hr/>
D	U					
	<table border="1" data-bbox="536 815 743 999"><tr><td>D</td><td>U</td></tr><tr><td> </td><td> </td></tr></table>	D	U			$\underline{\quad} + \underline{\quad} = \underline{\quad}$ <hr/>
D	U					
	<table border="1" data-bbox="536 1202 743 1386"><tr><td>D</td><td>U</td></tr><tr><td> </td><td> </td></tr></table>	D	U			$\underline{\quad} + \underline{\quad} = \underline{\quad}$ <hr/>
D	U					
	<table border="1" data-bbox="536 1590 743 1774"><tr><td>D</td><td>U</td></tr><tr><td> </td><td> </td></tr></table>	D	U			$\underline{\quad} + \underline{\quad} = \underline{\quad}$ <hr/>
D	U					