





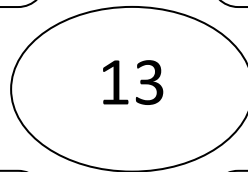

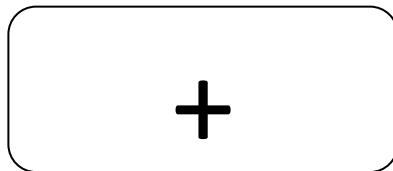
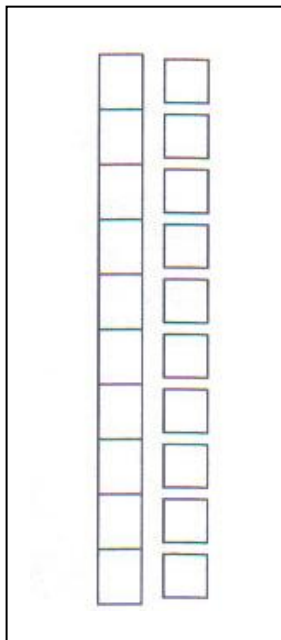
Nome: \_\_\_\_\_

Data: \_\_\_\_\_

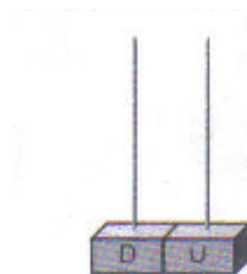


  $10 + \underline{\quad} = 13$   *treze*

Pinta onze unidades



Preenche o ábaco representando o número treze.



Escreve o número - \_\_\_\_\_

$13 = 6 + \underline{\quad}$

$13 = 5 + \underline{\quad}$

$13 = 8 + \underline{\quad}$

$13 = 10 + \underline{\quad}$